



INDIAN SCHOOL AL WADI AL KABIR

MIDTERM REVISION PAPER 2025 – 2026

NAME:

DATE: / /

CLASS: V SEC: _____ ROLL NO: _____

SUBJECT: EVS

TR'S SIGN:

General Instructions:

- This paper consists of **3** sections and **5** pages.
- All questions are compulsory.

SECTION – A

1. Read the statements given below and circle the option with the correct answer.

1.	Madar seeds are dispersed by _____.							
	a.	wind	b.	explosion	c.	water	d.	animals
2.	The underground stem of ginger is called _____.							
	a.	rhizome	b.	eyes	c.	tuber	d.	buds
3.	The lungs are protected by the _____.							
	a.	diaphragm	b.	ribcage	c.	bronchus	d.	nostrils
4.	The _____ controls and coordinates all our actions.							
	a.	nerves	b.	memory	c.	brain	d.	muscle
5.	Complete digestion takes place in the _____.							
	a.	stomach	b.	large intestine	c.	small intestine	d.	anus
6.	We breathe in _____ during breathing.							
	a.	oxygen	b.	carbon dioxide	c.	water vapour	d.	nitrogen

II. State whether the following statements are True or False.

1.	The food we eat daily is called a balanced diet.	
2.	The air we breathe out is warmer than the air we breathe in.	
3.	Every seed produced by a plant will germinate into a new plant.	
4.	The sensory nerves send messages from the sense organs to the brain.	

III. Match the terms in column I with their correct descriptions given in column II.

	Column I		Column II
1.	Liver	a.	Digestive juice that convert starch into sugar.
2.	Saliva	b.	They are like telephone wires.
3.	Water vapour	c.	These disperse through water.
4.	Lungs	d.	Secretes bile that helps in the digestion of fats..
5.	Nerves	e.	Condenses on the cool surface of the mirror.
6.	Coconut fruit	f.	Carry oxygen into the blood.

Ans: 1) _____ 2) _____ 3) _____ 4) _____ 5) _____ 6) _____

IV. For the following questions, two statements are given - one labelled Assertion (A) and the other labelled Reason (R). Select the correct answer to these questions from the codes (a), (b), (c), and (d) as given below.

- (a) Both A and R are true and R is the correct explanation of A
- (b) Both A and R are true, but R is not the correct explanation of A.
- (c) A is true, but R is false.
- (d) A is false, but R is true.

		Statement	Answer
1	Assertion	Soaked seeds kept in a refrigerator will not germinate.	
	Reason	Apart from water and air, seeds also need warmth to germinate.	
2	Assertion	We get our energy from food.	
	Reason	Digestion of food is completed in the small intestine.	
3	Assertion	The brain is made up of four main parts.	
	Reason	The brain is like a master computer.	
4	Assertion	There are some very fine hair in our nose.	
	Reason	The air that we breathe through our mouth is clean.	

SECTION – B

V. Give a reason for the following statements.

- 1. We should have a balanced diet.

Ans: _____

2. On a cold day, when we speak or blow out air from our mouth, clouds of mist come out..

Ans: _____

3. Flowers play an important role in reproduction.

Ans: _____

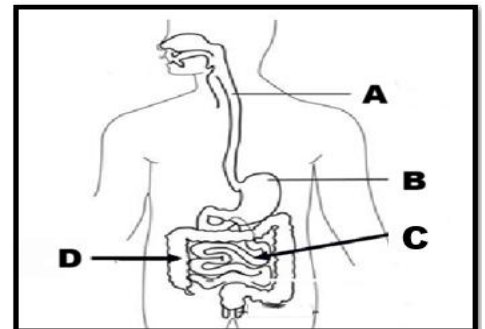
4. Different people sense things differently.

Ans: _____

VI. Observe the given pictures and answer the questions that follow.

1. Label the parts indicated in the diagram of the digestive system.

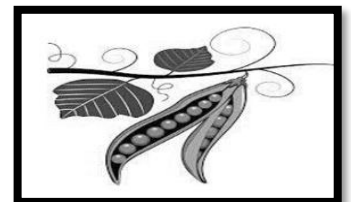
A	
B	
C	
D	



2. a. Identify the seed. _____

b. Mention one adaptation that allows this seed to disperse.

Ans: _____



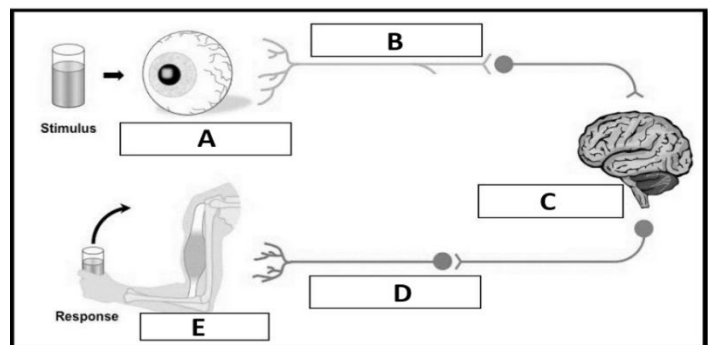
3. John was travelling from Goa to Mumbai by bus. As he was tired, he fell asleep with his mouth wide open. Explain why breathing through the nose is healthier than breathing through the mouth.



Ans: _____

4. Study the flow chart based on the nervous system and explain what each letter represents.

A	
B	
C	
D	
E	



SECTION – C

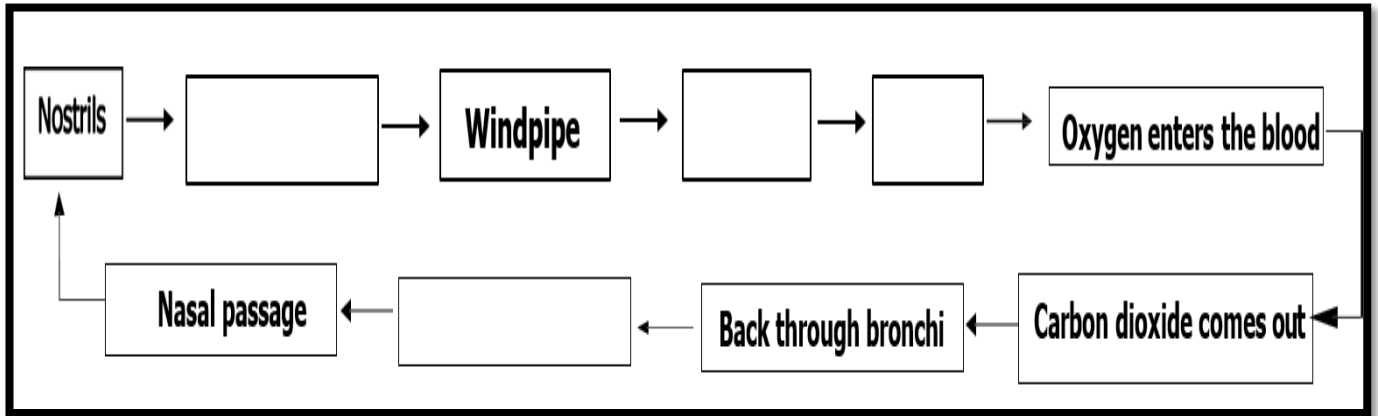
VII. Answer the following questions.

1. Define: Digestion - _____

2. What happens to the food that cannot be digested?

3. How do birds help in the dispersal of seeds?

4. Complete the flow-chart to show how air travels from the nose to the lungs and back out.



5. What are the functions of human lungs? (Write 2 points.)

6. "The Nervous System is one of the most important systems of our body.". Justify this statement.(Write 2 points.)

Ans: _____

7. Explain the function of the Spinal Cord.

Ans: _____

8. Differentiate between the Small Intestine and the Large Intestine. (Mention two points.)

Small Intestine	Large Intestine